

Name _____

Weekly Math HW / Return by Thursday, 3-17-14

Write the missing numbers.



6 in all

2 equal groups

_____ in each group

$6 \div 2 = \underline{\quad}$

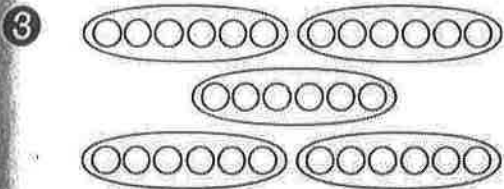


12 in all

3 equal groups

_____ in each group

$12 \div 3 = \underline{\quad}$

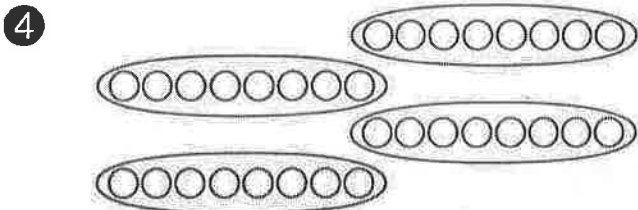


30 in all

_____ equal groups

_____ in each group

$30 \div 5 = \underline{\quad}$

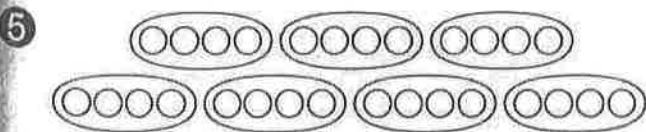


_____ in all

_____ equal groups

_____ in each group

_____ \div _____ = _____

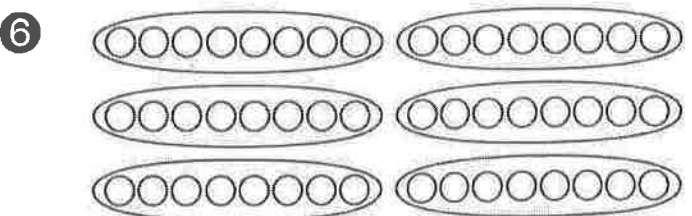


28 in all

_____ equal groups

_____ in each group

$28 \div 7 = \underline{\quad}$



_____ in all

_____ equal groups

_____ in each group

_____ \div _____ = _____



Tell what each number in the division sentence means.

Solve.

- ① Lara has 4 fifty-dollar bills. How much money does Lara have?
- ② Jamie scored 20 points in the basketball game. Tyler scored twice that amount. How many points did Tyler score?

- ③ Complete the pattern in the table below.

Number of Centimeters	25	30	35	40	45	50
Number of Millimeters	250	300	350			

Circle the letter for the correct answer.

- ④ Julie works 30 hours per week. How many hours does she work in 9 weeks?
- a) 39 hours
b) 390 hours
c) 360 hours
d) 270 hours
- ⑤ There are 40 students riding on each bus. There are 5 buses. How many students are riding on the buses?
- a) 45 students
b) 200 students
c) 20 students
d) 245 students