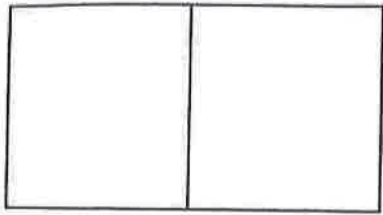


# Weekly Math HW

Return by Friday, 4-22-16

Write each missing number.

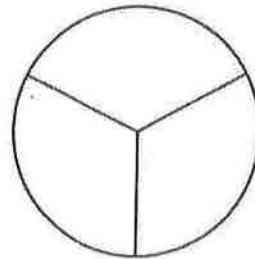
1



\_\_\_\_\_ equal parts

Each part is  $\frac{1}{2}$ .

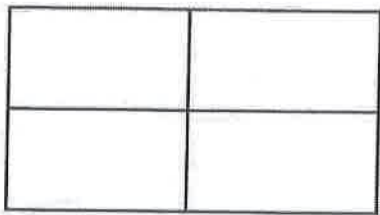
2



\_\_\_\_\_ equal parts

Each part is  $\frac{1}{3}$ .


3



\_\_\_\_\_ equal parts

Each part is  $\frac{1}{4}$ .

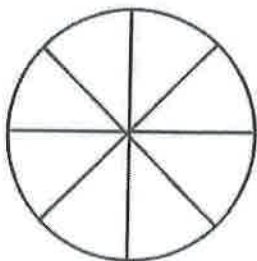
4



\_\_\_\_\_ equal parts

Each part is  $\frac{1}{8}$ .

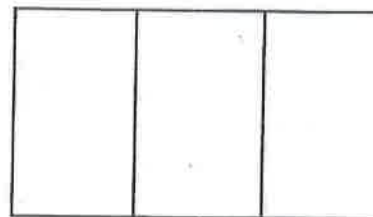
5



\_\_\_\_\_ equal parts

Each part is  $\frac{1}{8}$ .

6



\_\_\_\_\_ equal parts

Each part is  $\frac{1}{3}$ .

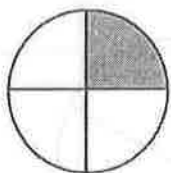


Tell how you found the missing numbers.



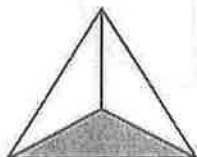
Match the picture with the fraction that names the shaded part.

1



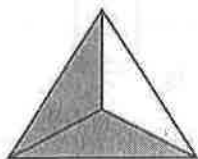
$\frac{1}{2}$

2



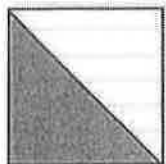
$\frac{1}{8}$

3




$\frac{2}{8}$

4



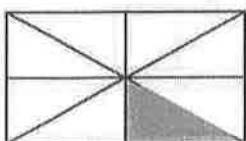
$\frac{1}{3}$

5



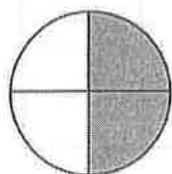
$\frac{1}{2}$

6



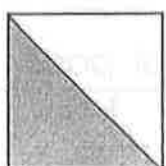
$\frac{1}{4}$

7



$\frac{2}{4}$

8



$\frac{2}{3}$



Tell how you made each match.