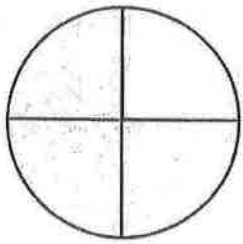


Weekly Math HW/DUE

Friday,
4-29-16

Write the missing numbers.

1



4 equal parts

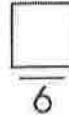


is shaded.

2




6 equal parts




is shaded.

3

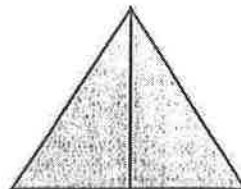


_____ equal parts



is shaded.

4

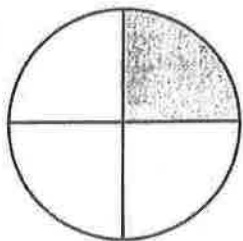


_____ equal parts



is shaded.

5



4 equal parts




is shaded.

6

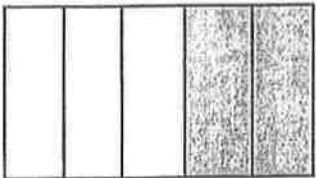


6 equal parts




is shaded.

7

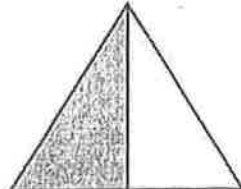


_____ equal parts



is shaded.

8



_____ equal parts



is shaded.



Tell how you found the missing numbers.



Solve.

- ① We cut the grapefruit in 2 equal pieces. I ate 1 piece. How much did I eat?
- ② We have 3 kittens. 2 kittens have stripes and 1 kitten has spots. What fraction of the kittens has spots?
-
- ③ Sloane has 4 cards in her hand. 3 cards are red. The rest are black. What fraction of the cards is red?
- ④ A pizza has 8 slices. 3 slices have olives. What fraction of the pizza has olives?

Circle the letter for the correct answer.

- ⑤ The book has 8 pages. 5 pages have pictures. What fraction of the book's pages has pictures?
- a) $\frac{1}{8}$
- b) $\frac{1}{5}$
- c) $\frac{8}{5}$
- d) $\frac{5}{8}$
- ⑥ Austin's room has 3 lights. 2 of the lights are on. 1 of the lights is off. What fraction of the lights in Austin's room is on?
- a) $\frac{1}{2}$
- b) $\frac{1}{3}$
- c) $\frac{2}{2}$
- d) $\frac{2}{3}$