

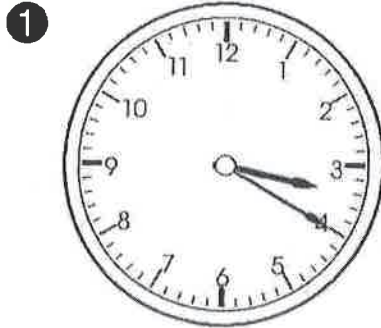
# Weekly Math Homework

Unit 18 • Time to the Minute

Name \_\_\_\_\_

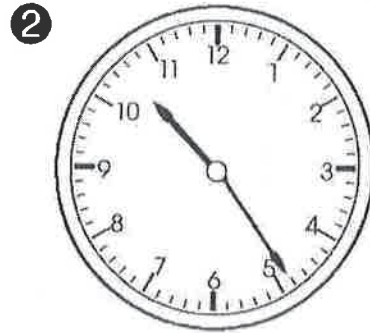
Return by Friday, 5/20/16

Write the time two ways. Write the missing numbers.



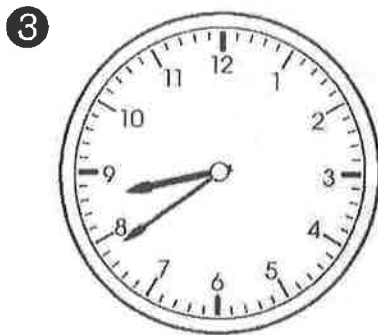
\_\_\_\_ : \_\_\_\_

20 minutes after \_\_\_\_



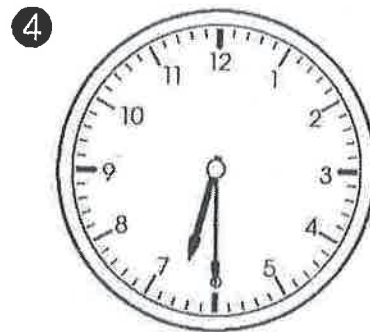
\_\_\_\_ : \_\_\_\_

\_\_\_\_ minutes after 10



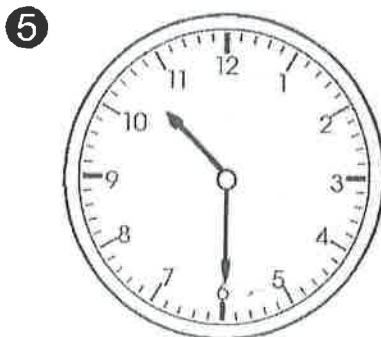
\_\_\_\_ : \_\_\_\_

\_\_\_\_ minutes after 8



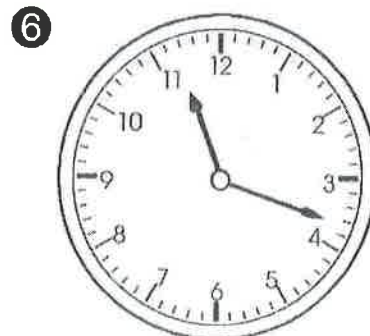
\_\_\_\_ : \_\_\_\_

half past \_\_\_\_



\_\_\_\_ : \_\_\_\_

half past \_\_\_\_



\_\_\_\_ : \_\_\_\_

\_\_\_\_ minutes after 11

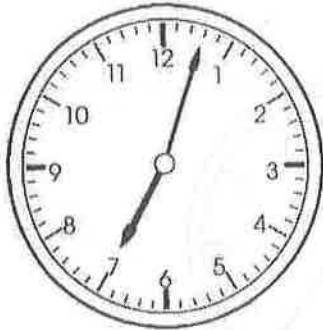


Draw a new minute hand on clocks 5 and 6 that shows 10 minutes later.



Write the time two ways. Write the missing numbers.


1



\_\_\_\_\_ : \_\_\_\_\_

\_\_\_\_\_ minutes after 7

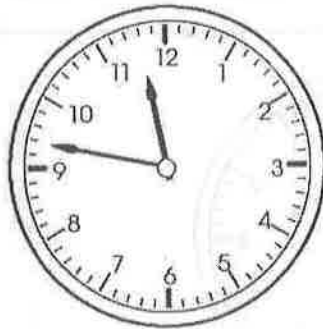
2



\_\_\_\_\_ : \_\_\_\_\_

\_\_\_\_\_ minutes after \_\_\_\_\_


3



\_\_\_\_\_ : \_\_\_\_\_

13 minutes before \_\_\_\_\_

4




\_\_\_\_\_ : \_\_\_\_\_

\_\_\_\_\_ minutes before \_\_\_\_\_

10 minutes later \_\_\_\_\_ : \_\_\_\_\_

5




\_\_\_\_\_ : \_\_\_\_\_

\_\_\_\_\_ minutes after \_\_\_\_\_

10 minutes later \_\_\_\_\_ : \_\_\_\_\_

6



\_\_\_\_\_ : \_\_\_\_\_

\_\_\_\_\_ minutes before \_\_\_\_\_

10 minutes later \_\_\_\_\_ : \_\_\_\_\_



Tell where the minute hand is pointing on clocks 5 and 6.