

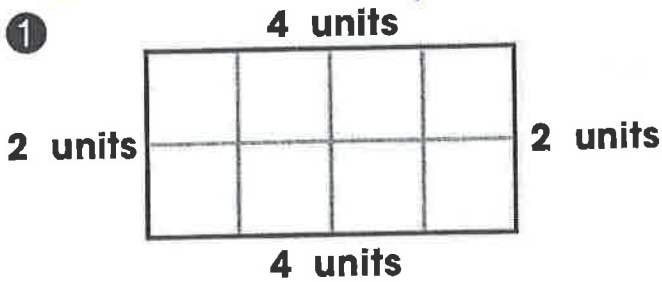
Name _____

Weekly Math HW

Find the perimeter. Count the units.

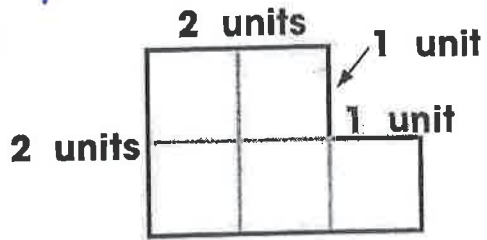
Return by Friday, 6/3/16

①




Perimeter: _____ units

②



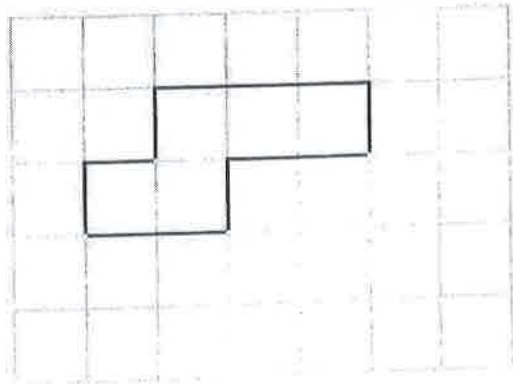
Perimeter: _____ units

③



Perimeter: _____ units

④




Perimeter: _____ units



Tell how you counted the units to find the perimeter.


Draw a closed figure. Write the perimeter.

1



Perimeter: _____ units


2



Perimeter: _____ units


Draw a closed figure to match the perimeter.

3




Perimeter: 8 units

4




Perimeter: 10 units

5



Perimeter: 9 units

6



Perimeter: 16 units



Tell how you found the perimeter.

