


Divide by 2

You can draw a picture to show how to divide.

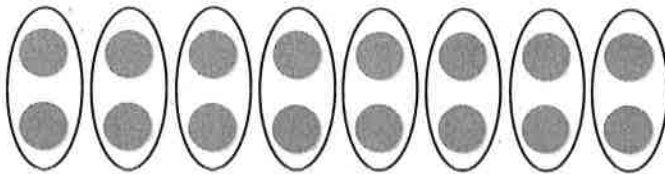
Find the quotient. $16 \div 2$

Step 1 Draw 16 counters.



*Math
HW
Return by
12-15-16*

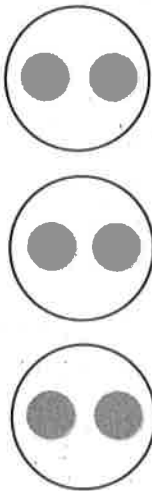
Step 2 Circle groups of 2. Continue circling groups of 2 until all 16 counters are in groups.




There are **8** groups of 2.
So, $16 \div 2 = 8$.

Write a division equation for the picture.

1.



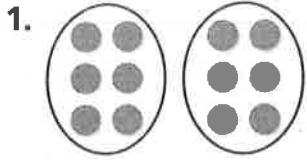
2.



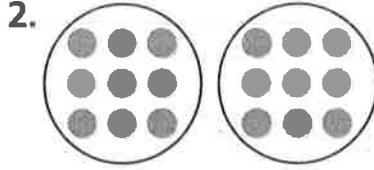
Name _____

Divide by 2

Write a division equation for the picture.



$12 \div 2 = 6$ or
 $12 \div 6 = 2$





Find the quotient. You may want to draw a quick picture to help.

4. _____ = $14 \div 2$

5. _____ = $4 \div 2$

6. $16 \div 2 =$ _____

7. $2 \overline{)18}$

8. $2 \overline{)12}$

9. $2 \overline{)14}$

Problem Solving

10. Mr. Reynolds, the gym teacher, divided a class of 16 students into 2 equal teams. How many students were on each team?

11. Sandra has 10 books. She divides them into groups of 2 each. How many groups can she make?
